

Days, months and seasons











1 Complete the months of the year:

J _ nua _ _ _ _ ly
 _ e _ ru _ ry A _ gu _ _
 M _ _ ch Se _ te _ ber
 _ p _ _ l Oc _ _ ber
 M _ y _ _ vem _ _ r
 Ju _ _ D _ ce _ _ er

2 Find the days of the week

Y	M	F	S	H	H	P	Y
A	Y	O	T	W	U	R	A
L	A	S	N	E	Z	G	M
P	D	E	U	D	K	O	S
C	R	Q	D	N	A	U	E
I	U	L	W	E	D	Y	E
A	T	U	E	S	D	A	Y
M	A	I	Y	D	Y	D	Y
O	S	M	U	A	X	S	H
N	K	A	D	Y	R	R	T
S	R	I	J	O	P	U	R
F	R	L	A	V	R	H	A
F	D	G	T	H	N	T	B

3 Draw the tree according to the season

	SPRING  		SUMMER  
			
AUTUMN		WINTER	

WHAT TIME IS IT

1 Choose the correct



- a) It's half past eight
- b) It's six o'clock
- c) It's six past eight



- a) It's a quarter past nine
- b) It's one o'clock
- c) It's three o'clock



- a) It's a quarter to nine
- b) It's a quarter to eight
- c) It's a quarter past eight



- a) It's nine o'clock
- b) It's eleven o'clock
- c) It's half past eleven



- a) It's half past two
- b) It's six o'clock
- c) It's two o'clock



- a) It's a quarter to eleven
- b) It's a quarter to twelve
- c) It's twelve o'clock

2 Draw the hands on the clock

	<p><i>It's eleven o'clock</i></p>		<p><i>It's a quarter to one</i></p>
	<p><i>It's half past three</i></p>		<p><i>It's a quarter past four</i></p>